



NAN HUA PRIMARY SCHOOL
PRIMARY ONE SEMESTRAL ASSESSMENT 2 - 2009
MATHEMATICS

Duration : 1 h 30 min

INSTRUCTIONS TO CANDIDATES

1. Write your name, register number and class in the blanks provided.
2. Do not turn over this page until you are told to do so.
3. Follow all instructions carefully.
4. Answer all questions.
5. Write your answers in this booklet.

Marks Obtained

Total Marks:

	/ 100
--	-------

Name : _____ ()

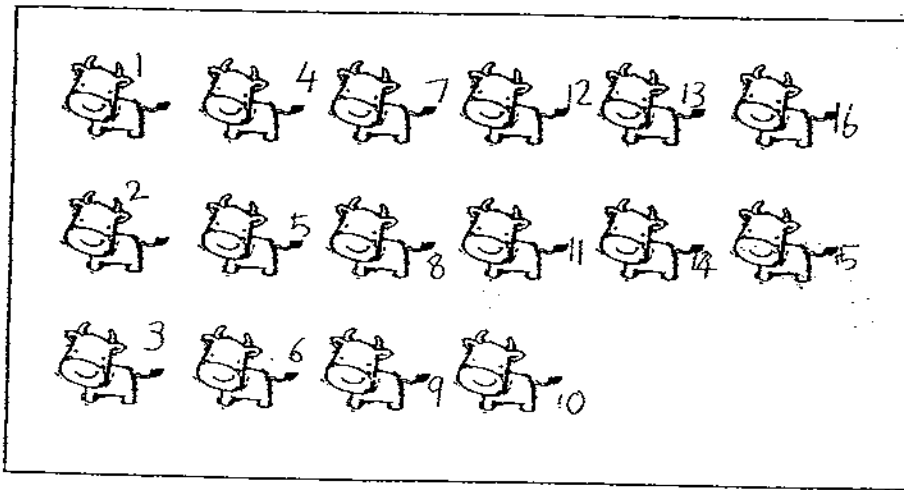
Class : P 1 _____

Date : 27 Oct 2009



Parent's Signature : _____

Section A (2 marks each)


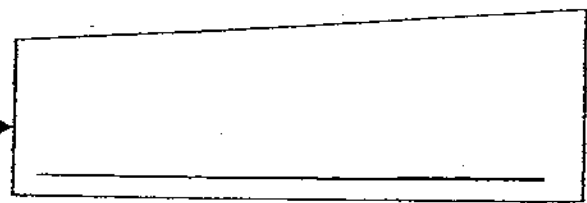
1) Count and write down your answer in **numeral**.

	<input data-bbox="1228 542 1434 1030" type="text"/>
---	---

2) Write in **numeral**.

Fifty-eight  

3) Write the number below in **words**.

Section B (2 marks each)


- 4) Rearrange the following numbers in order, beginning with the **greatest**.



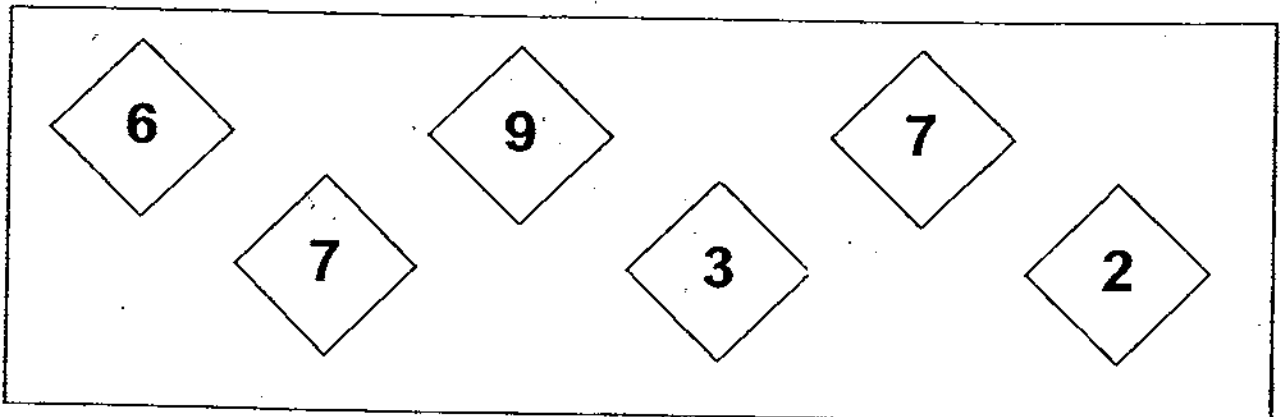
--	--	--	--	--

Greatest

- 5) Cross out (x) the 6th dog from the right.



- 6) Ring three numbers to make 14.




7) Use either '+' or '-' to complete the number sentences below.

(a) $66 \bigcirc 23 = 43$


(b) $16 \bigcirc 14 = 30$

8) Complete the following number pattern by filling in the missing number in the box.



The missing number in the box is

9) Cross out (X) the **two** numbers that are greater than 30 but smaller than 55.







- 10) Use 3 numbers below to make a **correct addition sentence**.
Each number can only be used once.

<div style="display: flex; justify-content: space-around; align-items: center;"> <div style="border: 1px solid black; border-radius: 50%; width: 40px; height: 40px; display: flex; align-items: center; justify-content: center;">35</div> <div style="border: 1px solid black; border-radius: 50%; width: 40px; height: 40px; display: flex; align-items: center; justify-content: center;">49</div> <div style="border: 1px solid black; border-radius: 50%; width: 40px; height: 40px; display: flex; align-items: center; justify-content: center;">14</div> <div style="border: 1px solid black; border-radius: 50%; width: 40px; height: 40px; display: flex; align-items: center; justify-content: center;">39</div> </div>
<div style="display: flex; justify-content: center; align-items: center; gap: 20px;"> <div style="border: 1px solid black; width: 40px; height: 40px;"></div> <div style="border: 1px solid black; border-radius: 50%; width: 40px; height: 40px;"></div> <div style="border: 1px solid black; width: 40px; height: 40px;"></div> <div style="font-size: 2em;">=</div> <div style="border: 1px solid black; width: 40px; height: 40px;"></div> </div>

- 11) Ring the box that has the **smallest** answer.

53 - 5	3 tens 6 ones	22 + 23
--------	---------------	---------

- 12) Ring the shape that **comes next** in the pattern.

	<div style="border: 1px solid black; width: 40px; height: 40px; margin-bottom: 10px; display: flex; align-items: center; justify-content: center;">  </div> <div style="border: 1px solid black; width: 40px; height: 40px; margin-bottom: 10px; display: flex; align-items: center; justify-content: center;">  </div> <div style="border: 1px solid black; width: 40px; height: 40px; display: flex; align-items: center; justify-content: center;">  </div>
--	---

Section C (2 marks each)

For Questions 13–16, write the correct answers in the given boxes.


13) $82 = \boxed{}$ tens 12 ones

14) $74 + 26 = \boxed{}$

15) $50 - 27 = \boxed{}$

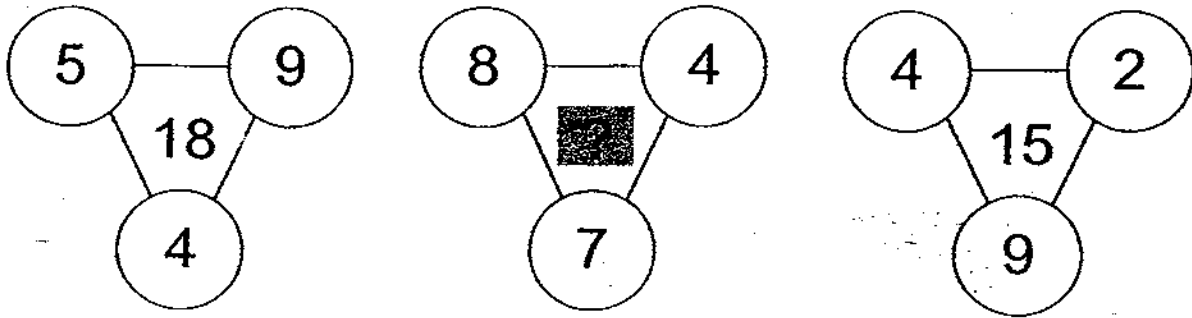
16) 4 sixes = $\boxed{} + 6 + 6 + 6$

17) Write a subtraction sentence for the picture below.



$\boxed{} \bigcirc \boxed{} = \boxed{}$

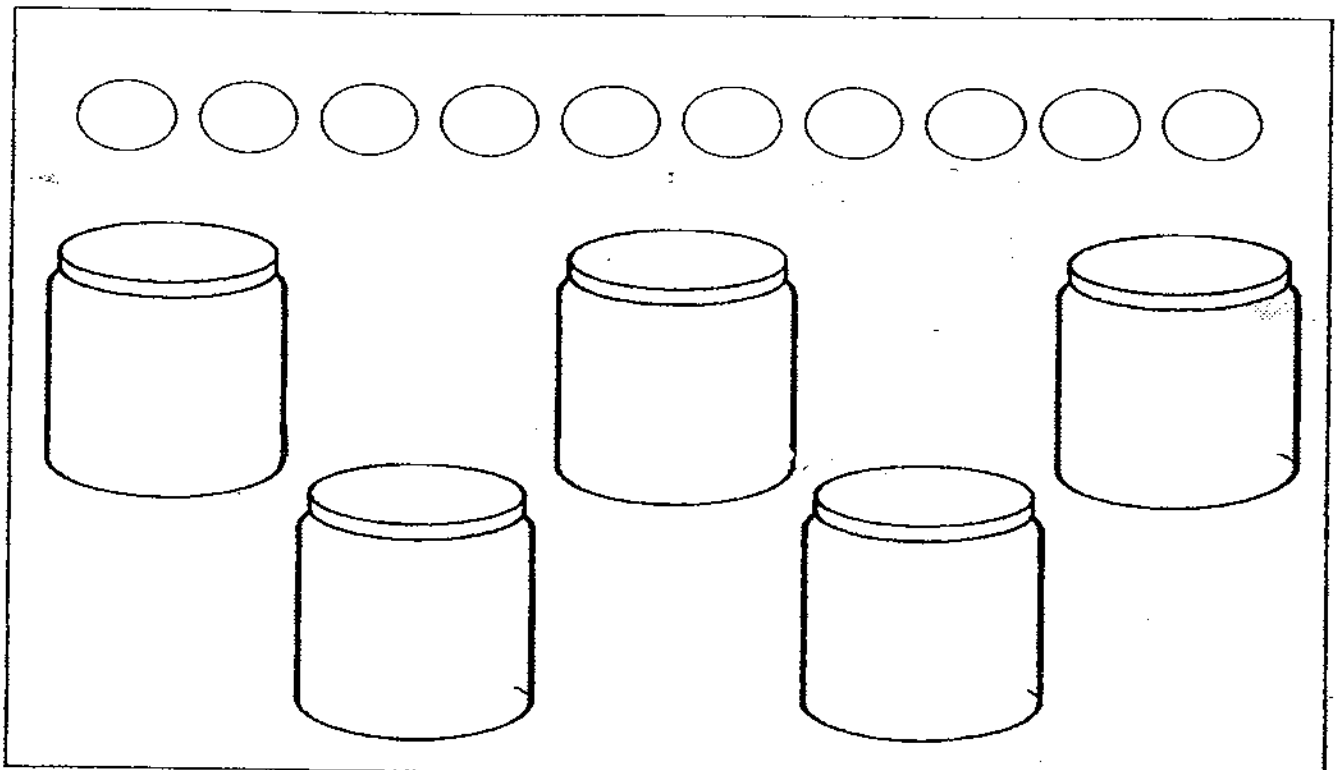
Section D (2 marks each)

18) Complete the following number pattern by filling in the missing number in the box.



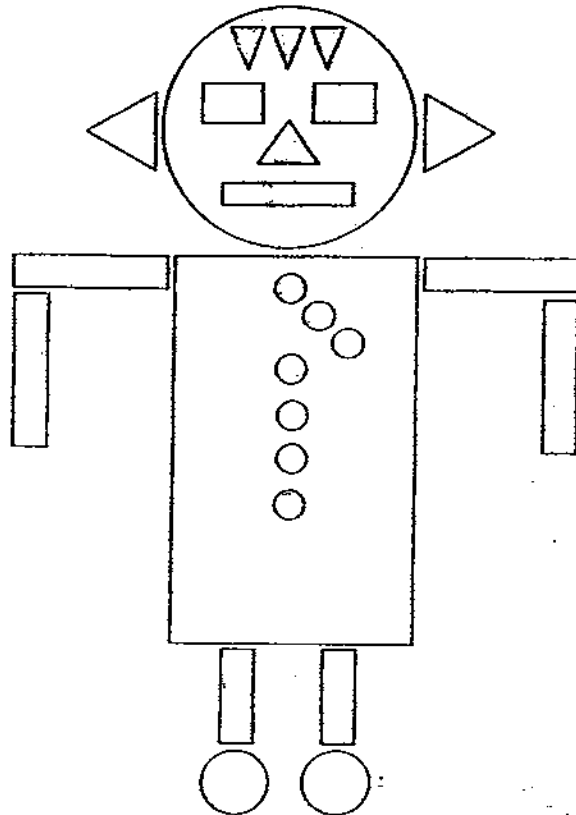
The missing number in the box is

19) Using the given eggs, draw an equal number of () in each jar.



Section E (2 marks each)

For Questions 20 and 21, look at the picture below and fill in the correct answers in the given boxes.



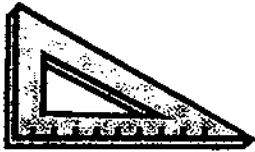
20) There are circles.

21) There are ~~more~~ rectangles **than** triangles.

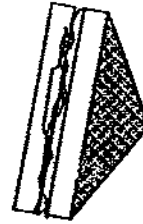
22) Tick all the items which do not have the shape of a triangle.





i



ii



iii



iv

23) Arrange the trees in order. Begin with the **shortest**.



A






B



C



D



shortest

Section F (2 marks each)

Look at the numbers in the table. For Questions 24–27, fill in the boxes with the correct numbers.


21	22	23	24	25	26	27	28	29	30
31	32	33	34	35	36	37	38	39	40
41	42	43	44	45	46	47	48	49	50
51	52	53	54	55	56	57	58	59	60
61	62	63	64	65	66	67	68	69	70
71	72	73	74	75	76	77	78	79	80
81	82	83	84	85	86	87	88	89	90
91	92	93	94	95	96	97	98	99	100

24) 86 comes just before

25) 4 less than 55 is

26) 29 is between 28 and

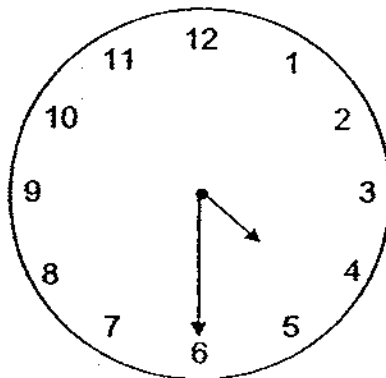
27) comes just after 74.

28) Ring these sweets () into groups of 3 and complete the number sentence below.

 groups of 3.'" data-bbox="201 238 788 526"/>

There are groups of 3.

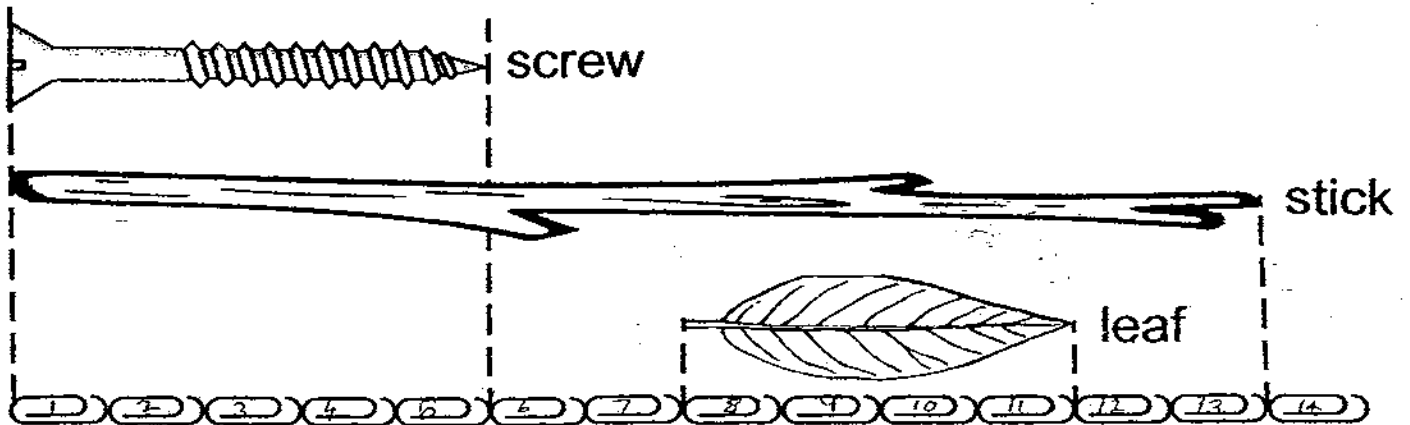
For Question 29, look at the clock below and fill in the given box with the correct answer.




29) The time on the clock shows

Section G (2 marks each)


For Questions 30–33, study the picture below carefully.
Write the correct answers in the given boxes.



30) The leaf is about  long.

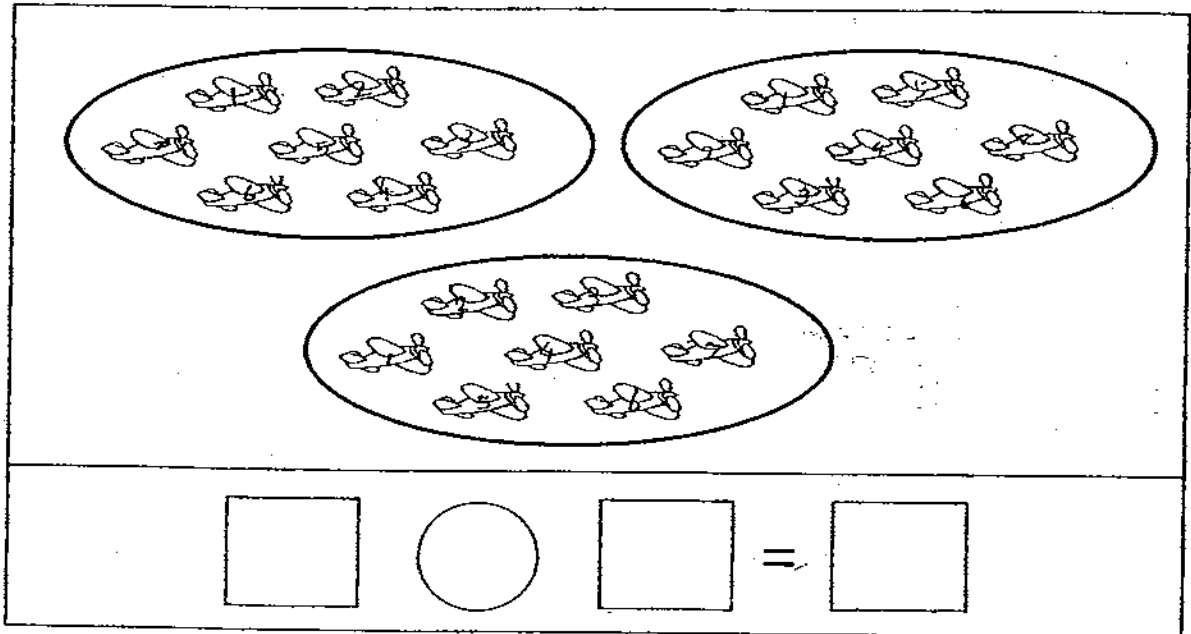
31) The screw is about  long.

32) The stick is about  longer than the screw.


33) The **total** length of the 3 objects is about  long.

Section H (2 marks each)

34) Write a multiplication sentence for the picture below.

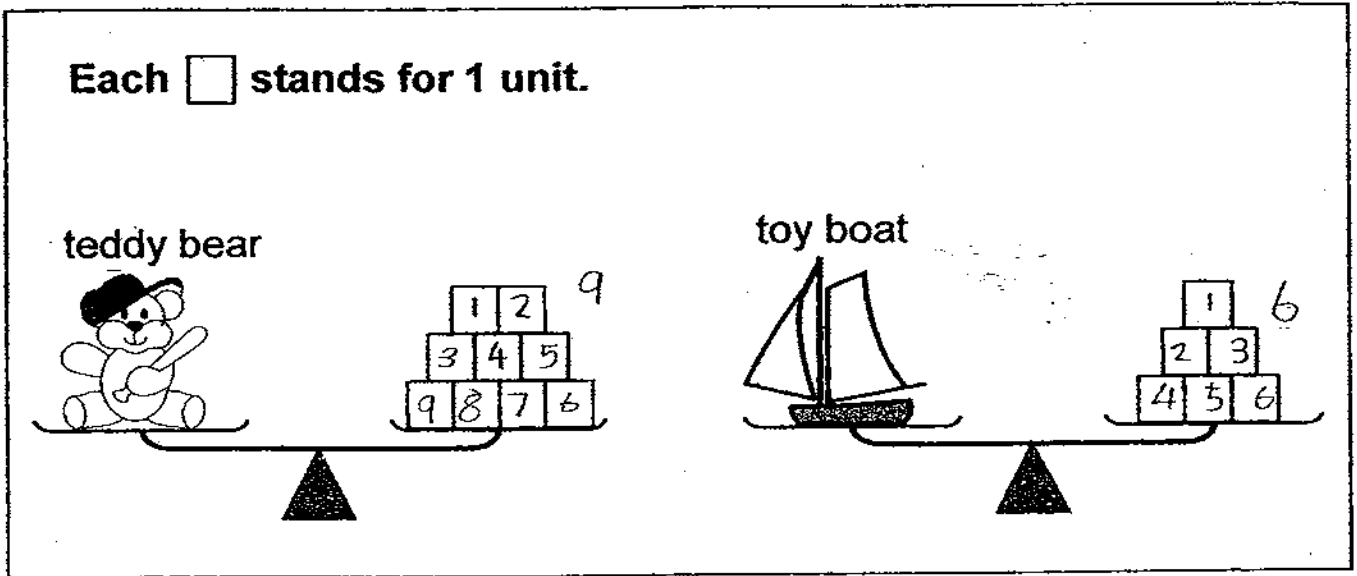


35) Colour 5 coins to make 85¢.



Section I (2 marks each)

For Questions 36–38, study the picture below carefully.
Write the correct answers in the given boxes.



36) The mass of the teddy bear is units.


37) The mass of the toy boat is units.

38) The mass of the toy boat is units **lighter** than the mass of the teddy bear.

Section J (2 marks each)

The picture graph below shows the sports that 20 boys like. Study it carefully and answer Questions 39-42. Each boy chooses only 1 sport.

Our Favourite Sports



39) boys like basketball.

40) The **least popular** sport is .

41) boys like football .

42) **more** boys like **swimming** than **tennis**.

Section K (4 marks each)

Read the story sums carefully. Show all your workings clearly.

- 43) Harry has 63 stickers. He has 21 more stickers than Dora.
How many stickers does Dora have?

$$\square \ominus \square = \square$$

Dora has _____

- 44) Caili had some money.
After buying a book for \$24, she had \$46 left.
How much money did Caili have **at first**?

$$\$ \square - \$ 24 = \$ 46$$

Caili had _____

- 45) An elephant has 4 legs.
How many legs do 5 elephants have altogether?



$$\square \quad \bigcirc \quad \square = \square$$

They have _____

- 46) Sam gets 86 marks for a test.
Tom gets 19 fewer marks than Sam.
How many marks does Tom get?

$$\square \quad \bigcirc \quad \square = \square$$

Tom gets _____



Please check your work carefully.



End – of – paper

Answer Ke


EXAM PAPER 2009

SCHOOL : NAN HUA PRIMARY
SUBJECT : PRIMARY 1 MATHEMATICS

TERM : SA2

1)16 2)58 3)forty-three 4)82, 72, 28, 27 5)0 X 0 0 0 0 0


6)9, 3, 2 7)a)- b)+ 8)32 9)50, 39 10)35+14=49

11)3 tens 6 ones 12) 13)7 14)100 15)23 16)6

17)30-6=24

18)19

19)



20)10 21)4

22)i, ii

23)C, D, B, A


24)87

25)51

26)30

27)75

28)



29)half past four

30)4

31)5

32)8

33)22

34)3x7=21

35)50c, 10c, 10c, 10c, 5c

There are 5 group of 3

36)9

37)6

38)3

39)7

40)tennis

41)4

42)3

43)63-21=42

Dora has 42 stickers.

44)\$24+\$46=\$70

Caili had \$70 at first.

45)5x4=20

They have 20 legs altogether.

46)86-19=67

Tom gets 67 marks.