



**ROSYTH SCHOOL  
2023 TERMLY REVIEW  
PRIMARY 5 MATHEMATICS  
PAPER 1**

Name: \_\_\_\_\_

Register No. \_\_\_\_\_

Class: Pr 5 - \_\_\_\_\_

Date: \_\_\_\_\_

Parent's Signature: \_\_\_\_\_

Total time for Booklet A and B: 25 minutes

**Booklet A**

**Instructions to Pupils:**

1. Do not turn over this page until you are told to do so.
2. Follow all instructions carefully.
3. Answer all questions.
4. Use a dark blue or black ballpoint pen to write your answers in the bracket provided for each question.
5. Do not use correction fluid/tape or highlighters.
6. The use of a calculator is not allowed.

Section	Maximum Mark	Marks Obtained
Paper 1 (Booklet A)	5	

\* This paper consists of 4 printed pages altogether (including the cover page).

This is a non-weighted assessment. The purpose of this Termly Review is to monitor your learning and to provide feedback.

Questions 1 to 5 carry 1 mark each. For each question, four options are given. One of them is the correct answer. Make your choice (1, 2, 3 or 4) and write your answer in the brackets provided.

*All diagrams in this paper are not drawn to scale unless stated otherwise.*

(5 marks)

1. In 9 186 320, the value of digit 1 is \_\_\_\_\_.

- (1) 100
- (2) 1000
- (3) 10 000
- (4) 100 000

(     )

2. Which one of the following fractions is nearest to 1?

- (1)  $\frac{4}{5}$
- (2)  $\frac{8}{9}$
- (3)  $1\frac{1}{3}$
- (4)  $1\frac{1}{4}$

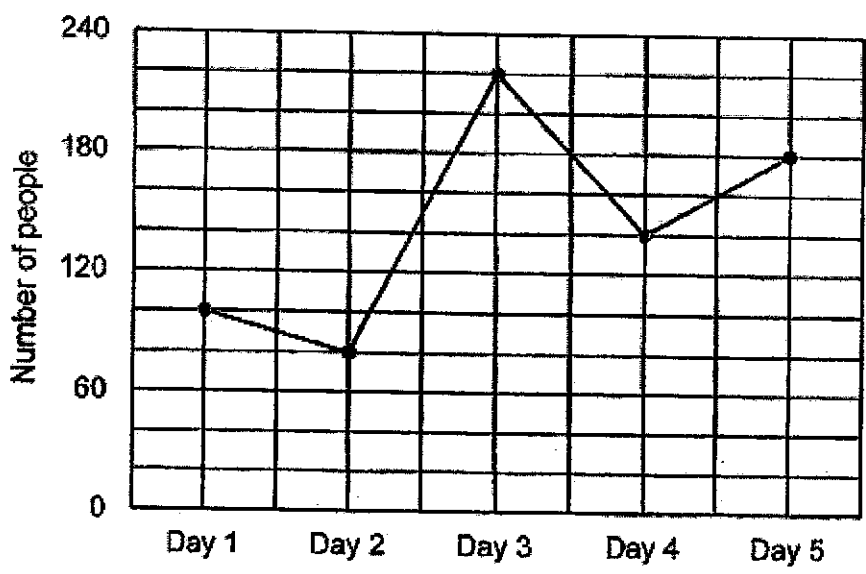
(     )

3. Which one of the following has the same value as  $42 \div 6 - 3 \times 2$ ?

- (1) 1
- (2) 7
- (3) 8
- (4) 28

(     )

4. The line graph below shows the number of people attending a drama audition over 5 days.

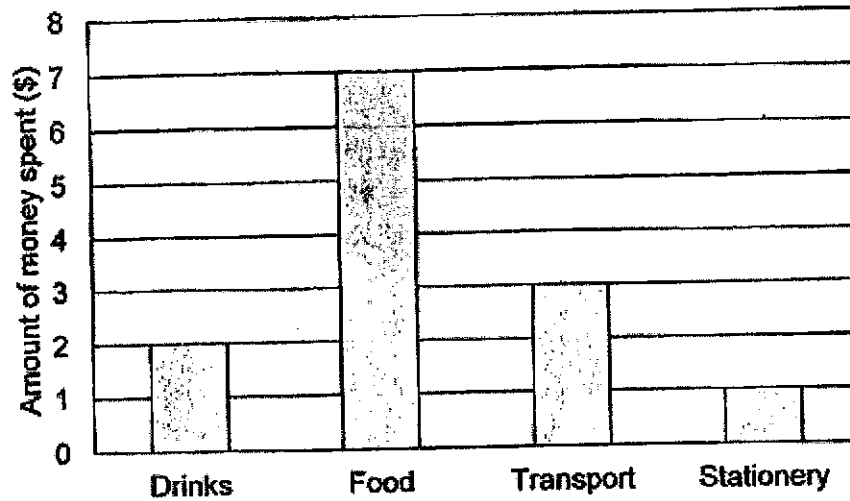


On which two days was there a difference of 40 people attending the audition?

- (1) Day 1 and Day 2
- (2) Day 2 and Day 3
- (3) Day 3 and Day 4
- (4) Day 4 and Day 5

( )

5. Betty was given \$15 on an outing. The graph below shows how she spent some of her money.



Betty saved the remaining amount of money. What fraction of Betty's money did she save?

- (1)  $\frac{2}{13}$
- (2)  $\frac{11}{13}$
- (3)  $\frac{2}{15}$
- (4)  $\frac{13}{15}$

( )

Go on to Booklet B



**ROSYTH SCHOOL  
2023 TERMLY REVIEW  
PRIMARY 5 MATHEMATICS  
PAPER 1**

Name: \_\_\_\_\_

Register No. \_\_\_\_\_

Class: Pr 5 - \_\_\_\_\_

Date: \_\_\_\_\_

Parent's Signature: \_\_\_\_\_

Total time for Booklet A and B: 25 minutes

**Booklet B**

**Instructions to Pupils:**

1. Do not turn over this page until you are told to do so.
2. Follow all instructions carefully.
3. Answer all questions.
4. Use a dark blue or black ballpoint pen to write your answers in the space provided for each question.
5. Do not use correction fluid/tape or highlighters.
6. The use of a calculator is not allowed.

Section	Maximum Mark	Marks Obtained
Paper 1 (Booklet B)	15	

\* This booklet consists of 5 pages (including this cover page).

This is a non-weighted assessment. The purpose of this Termly Review is to monitor your learning and to provide feedback.

Questions 6 to 8 carry 1 mark each. Questions 9 to 14 carry 2 marks each. Write your answers in the spaces provided. For questions which require units, give your answers in the units stated.

(15 marks)

Do not write in this space.

6. What is eight million, four hundred and five thousand and twenty-six in numeral?

Ans: \_\_\_\_\_

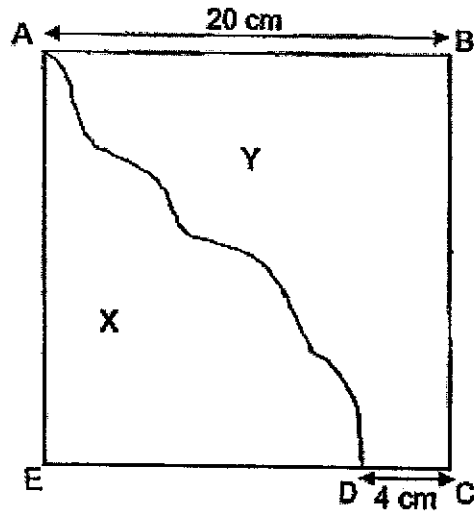
7. A plane departed from Changi Airport. After 3 h 40 min, it arrived at its destination at 05 04 Singapore time. What time did the plane depart from Changi Airport? (Give your answer in 24h clock.)

Ans: \_\_\_\_\_

8. Nicole mixed  $\frac{1}{4}$  litres of orange syrup with  $\frac{5}{12}$  litres of water to make orange drink. How many litres of orange drink did she make? (Give your answer in its simplest form)

Ans: \_\_\_\_\_ litres

9. Square ABCE is divided into 2 parts, X and Y.  $AB = 20$  cm and  $CD = 4$  cm. What is the difference in the perimeter between Figure X and Figure Y?



Do not  
write in  
this space.

Ans: \_\_\_\_\_ cm

10. Use all the digits 5, 6, 1, 8 to form

a) the largest 4-digit odd number.

Ans: \_\_\_\_\_

b) the number closest to 6000.

Ans: \_\_\_\_\_

11. Find the value of  $(30 - 17) + 4 \times 6 - 20$ .

Do not  
write in  
this  
space.

Ans: \_\_\_\_\_

☐

12. Marie was given some money to spend at a carnival. She asked for \$20 more as she needed more money. After she spend \$40.85, she had \$5.35 left. How much did Marie have at first?

Ans: \$ \_\_\_\_\_

☐

13. Carrine had 18 kg of flour. She used  $\frac{5}{9}$  of it to bake cookies. How much flour had she left?

Ans: \_\_\_\_\_ kg

☐



14. Mdm Lim went to a supermarket to buy 29 oranges. The oranges were priced at \$0.70 cents each or \$5.00 per bag of 8 oranges. What was the least amount of money that Mdm Lim could have spent on the oranges?

Do not  
write in  
this  
space.

Ans: \$ \_\_\_\_\_



End of Paper 1





**ROSYTH SCHOOL  
2023 TERMLY REVIEW  
PRIMARY 5 MATHEMATICS  
PAPER 2**

Name: \_\_\_\_\_

Register No. \_\_\_\_\_

Class: Pr 5 - \_\_\_\_\_

Date: \_\_\_\_\_

Parent's Signature: \_\_\_\_\_

Time: 30 minutes

**Instructions to Pupils:**

1. Do not turn over this page until you are told to do so.
2. Follow all instructions carefully.
3. Answer all questions.
4. Use a dark blue or black ballpoint pen to write your answers in the space provided for each question.
5. Do not use correction fluid/tape or highlighters.
6. The use of a calculator is allowed.

Questions	Maximum Mark	Marks Obtained
Q 1 – 5	5	
Q 6 – 14	15	
Q15 - 19	16	
<b>Total</b>	<b>36</b>	

\* This booklet consists of **6** pages (including this cover page).  
This is a non-weighted assessment. The purpose of this Termly Review is to monitor your learning and to provide feedback.

For questions 15 to 19, show your working clearly and write your answers in the spaces provided. The number of marks available is shown in the brackets [ ] at the end of each question.

Do not  
write in  
this  
space

15. Mr Ismail started driving from Singapore to Kuala Lumpur at 05 45. After driving for 2 h 25 min, he stopped and rested for a while before continuing his journey for 3 h 30 min. He reached Kuala Lumpur at 13 30. How long did he rest? (Give your answer in hours and minutes.)

Ans: \_\_\_\_\_ h \_\_\_\_\_ min [2]

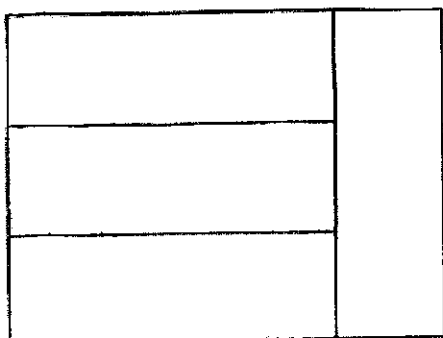
16. Hafiz had twice as many stickers as Ken and 3 times as many stickers as Alan. The boys have 462 stickers altogether. How many stickers did Ken have?

Do not write  
in this space

Ans: \_\_\_\_\_ [3]



17. The figure below is made up of 4 identical rectangles. Given that the perimeter of the figure is 112cm, find the total area of the figure.



Do not write  
in this space

Ans: \_\_\_\_\_ [3]



18. There are three laptops for sale.  
The total cost of laptop A and laptop B is \$2215.  
The total cost of laptop B and laptop C is \$3709.  
Laptop C costs four times as much as laptop A.

Do not write  
in this space

- (a) How much more does laptop C cost than laptop A?

Ans: (a) \_\_\_\_\_ [1]

- (b) How much does laptop B cost?

Ans: (b) \_\_\_\_\_ [3]

19. Joseph wants to make 10 small identical rabbits and 5 large identical rabbits using wire. He has made 9 small rabbits and 3 large ones using 648 cm of wire. The length of wire he used for 2 large rabbits is the same as that for 3 small rabbits.

Do not write  
in this space

- (a) What is the length of wire needed to make one large rabbit?

Ans: (a) \_\_\_\_\_ [2]

☐

- (b) What is the length of the wire needed to make the remaining rabbits? Leave your answer in cm.

Ans: (a) \_\_\_\_\_ [2]

☐

End of paper



**SCHOOL : ROSYTH PRIMARY SCHOOL**

**LEVEL : PRIMARY 5**

**SUBJECT : MATH**

**TERM : TERM 1 (2023)**

---

**BOOKLET A**

Q 1	Q2	Q3	Q4	Q5
4	2	1	4	3

6)	8405026
7)	13.24 P.M.
8)	2/3
9)	8cm
10)	a)8651 b)5861
11)	17
12)	\$26.20
13)	8kg
14)	\$18.50
15)	1h 50min
16)	11u→462 1u→462 ÷ 11 = 42 3u→42 x 3 = 126

17)	$14u \rightarrow 112$ $1u \rightarrow 112 \div 14 = 8$ $3u \rightarrow 8 \times 3 = 24$ $3u \times 1u \rightarrow 8 \times 24 = 192$ $4 \text{ sets} \rightarrow 192 \times 4 = 768\text{cm}^2$
18)	a)\$1494 b)\$1717
19)	a)72cm b)192cm