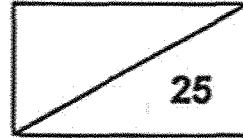


Catholic High School (Primary)  
Primary 4 Mathematics 2025  
Weighted Assessment 3

NAME : \_\_\_\_\_ ( )

DATE : \_\_\_\_\_

CLASS : \_\_\_\_\_



PARENT'S SIGNATURE : \_\_\_\_\_

Section A

Questions 1 to 4 carry 2 marks each. For each question, four options are given. One of them is the correct answer. Make your choice (1, 2, 3 or 4) and write your choice in the bracket provided. All diagrams are not drawn to scale. (8 marks)

1. Which digit in 17.48 is in the tenths place?

(1) 1

(2) 7

(3) 8

(4) 4

( )

2. Express  $6\frac{7}{25}$  as a decimal.

(1) 6.07

(2) 6.25

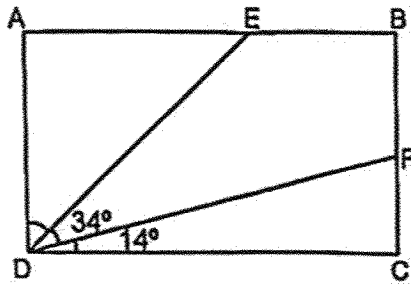
(3) 6.28

(4) 6.70

( )

(Go on to the next page)

3. ABCD is a rectangle.  $\angle EDF$  is  $34^\circ$  and  $\angle FDC$  is  $14^\circ$ . Find  $\angle ADE$ .



- (1)  $42^\circ$
- (2)  $48^\circ$
- (3)  $56^\circ$
- (4)  $76^\circ$

( )

4. The number line below is marked at equal intervals. What decimal is represented by the letter G on the number line shown?



- (1) 8.007
- (2) 8.017
- (3) 8.07
- (4) 8.17

( )

**Section B**

Questions 5 to 9 carry 2 marks each. Show your working clearly and write your answers in the spaces provided. For questions which require units, give your answers in the units stated. All diagrams are not drawn to scale. (10 marks)

Do not write  
in this space

5. Round 39.95 to 1 decimal place.

Ans: \_\_\_\_\_

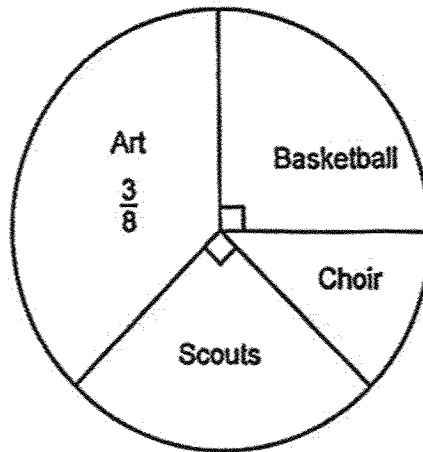
6. Complete the number pattern.

7.38, 7.48, 7.47, 7.57, 7.56, 7.66, \_\_\_\_\_, 7.75, 7.74, 7.84

Ans: \_\_\_\_\_

In a class of 40, the pupils participated in different Co-Curricular Activities. Each pupil only participated in 1 Co-Curricular Activities. The pie chart below shows their participation. Use the information given to answer questions 7 and 8.

Do not write  
in this space



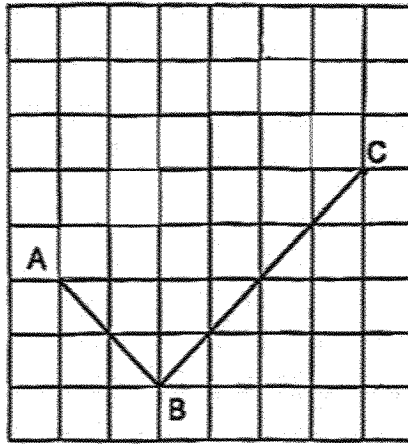
7. What fraction of the pupils in the class participated in Choir?

Ans: \_\_\_\_\_

8. How many pupils in the class participated in Basketball?

Ans: \_\_\_\_\_

9. In the square grid below, line AB and line BC form half of a rectangle. Draw 2 lines to complete the rectangle ABCD. Label rectangle ABCD.



Do not write  
in this space



**SECTION C**

For Questions 10 to 11, show your working clearly and write your answers in the spaces provided. The number of marks available is shown in brackets [ ] at the end of each question or part-question. All diagrams are not drawn to scale.

Do not write  
in this space

(7 marks)

10. A water bottle contained 1.2 l of water. It contained 2.5 l less water than a kettle. How much water was there in 4 such kettles?

Ans: \_\_\_\_\_ [3]

11. Mrs Tan had 7.86 kg of flour less than Mrs Siva. After Mrs Siva used 10 kg of flour, Mrs Tan had 3 times as much flour as Mrs Siva had left.

Do not write  
in this space

(a) How many more kilograms of flour did Mrs Tan have than Mrs Siva in the end?

Ans: (a) \_\_\_\_\_ [2]

(b) How many kilograms of flour did Mrs Siva have left?

Ans: (b) \_\_\_\_\_ [2]

END OF PAPER



**SCHOOL : CATHOLIC HIGH PRIMARY SCHOOL**  
**LEVEL : PRIMARY 4**  
**SUBJECT : MATHEMATICS**  
**TERM : 2025 WEIGHTED ASSESSMENT 3**

Q1	Q2	Q3	Q4	Q5	Q6				
4	3	1	2	40.0	7.65				

Q7	$\frac{2}{8} + \frac{2}{8} + \frac{3}{8} = \frac{7}{8}$ $1 - \frac{7}{8} = \frac{1}{8}$
Q8	$40 \div 8 = 5$ $5 \times 2 = 10$
Q9	<p>A 6x6 grid with a quadrilateral ABCD. Point A is at (1, 3), B is at (3, 1), C is at (5, 3), and D is at (4, 5). The grid lines are spaced 1 unit apart.</p>
Q10	$1.2 + 2.5 = 3.7$ $3.7 \times 4 = 14.8$
Q11	<p>a) <math>10 - 7.86 = 2.14</math> kg</p> <p>b) <math>2.14 \div 2 = 1.07</math> kg</p>

