


NANYANG PRIMARY SCHOOL
Term 1 Weighted Assessment
Science
Primary 4



Name: _____ () Date: _____

Class: 4 _____ Parent's signature: _____

Dear Parent/Guardian,

Please sign the Weighted Assessment paper and have your child/ward return it the next day. Any query should be raised at the same time when returning the paper.

Section A: Multiple Choice Questions (10 marks)

For each question from 1 to 5, four options (1, 2, 3 and 4) are given. One of them is the correct answer. Indicate your choice in the brackets provided.

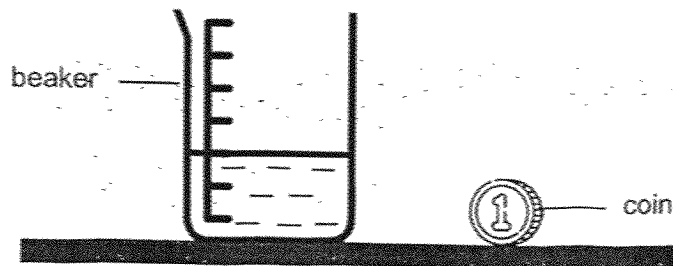
1. Which one of the following options consists of non-matter only?

Non-matter	
(1) Thunder	Air
(2) Wind	Lightning
(3) Sunlight	Music
(4) Saliva	Shadow

()



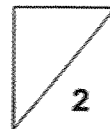
2. Jasmine placed a coin into a beaker of water as shown below.



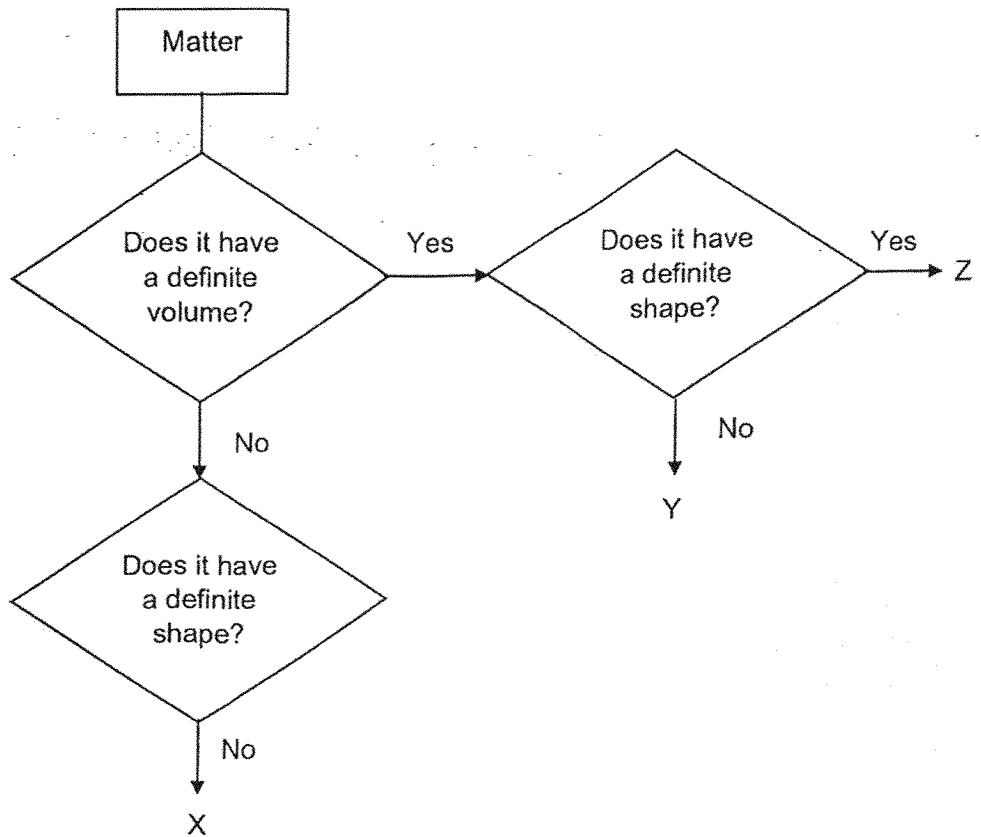
Which one of the following about the coin is correct?

- (1) Both the shape and volume of the coin changed.
- (2) Both the shape and volume of the coin did not change.
- (3) The volume of the coin changed but the shape did not change.
- (4) The shape of the coin changed but the volume did not change.

()



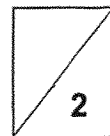
3. The diagram below shows a flowchart.



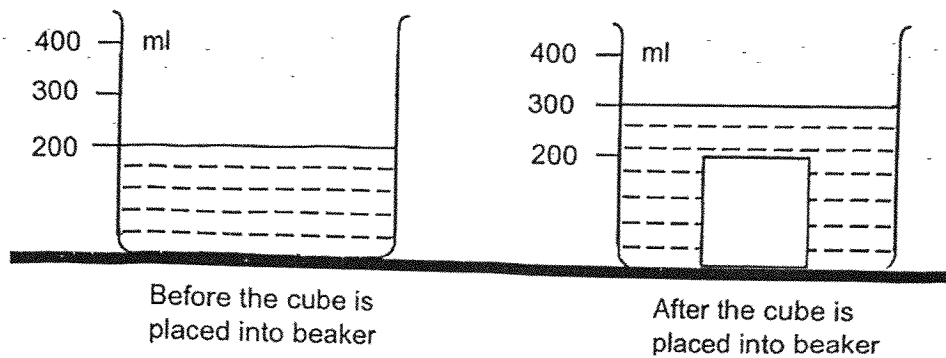
Which of the following letters best represents orange juice?

- (1) X
- (2) Y
- (3) Z
- (4) X and Y

()



4. The diagram below shows the observations made before and after a cube is placed into a beaker of water.

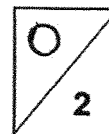


Which of the following information can be obtained from the experiment above?

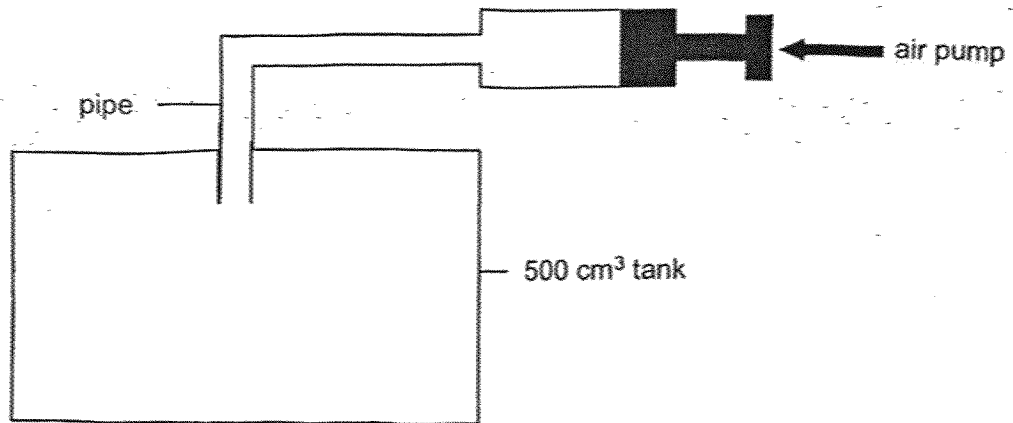
- A The cube weighs 100 g.
- B The cube occupies space.
- C The volume of the cube is 100 cm^3 .
- D The volume of the water in the beaker has increased to 300 cm^3 .

- (1) A and B only
- (2) B and C only
- (3) A, B and C only
- (4) B, C and D only

()



5. Steven has a 500 cm^3 tank as shown below. Using an air pump, he pumped in 200 cm^3 of air into the tank.



How much air is there in the tank in the end?

- (1) 200 cm^3
- (2) 300 cm^3
- (3) 500 cm^3
- (4) 700 cm^3

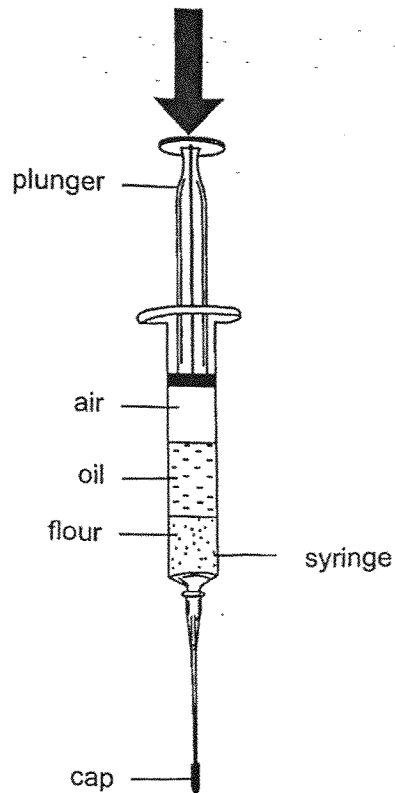
()



Section B: Open-Ended Questions (5 marks)

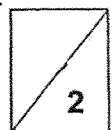
For questions 6 and 7, write down your answers in the spaces provided.

6. Study the diagram below.

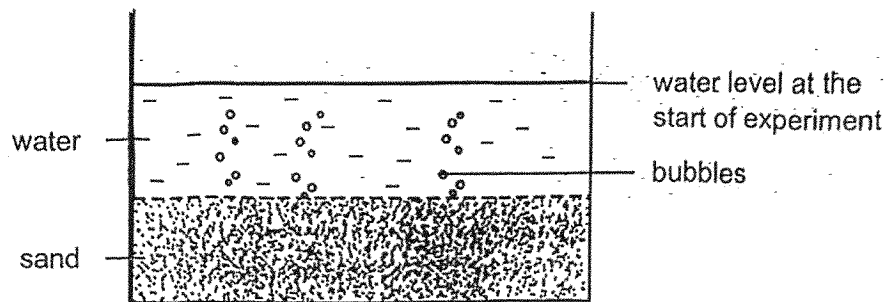


(a) State two properties of liquid. [1]

(b) Can the plunger be pushed downwards in the direction as shown? Using a property of matter, explain your answer. [1]



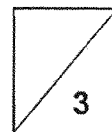
7. When Peter poured water into a container of sand, bubbles are observed appearing from the sand and moving upwards as shown below.



- (a) After 5 minutes, what will Peter observe about the water level? [1]

- (b) Explain your answer in (a). [2]

- End of Paper -



SCHOOL : NANYANG PRIMARY SCHOOL
LEVEL : PRIMARY 4
SUBJECT : SCIENCE
TERM : 2025 WEIGHTED ASSESSMENT 1

1	3
2	2
3	2
4	2
5	3
7a	Liquid has no definite shape. Liquid has a definite volume / cannot be compressed.
7b	Yes. Air can be compressed. / does not have definite volume.
8a	Water level will decrease.
8b	There is air / air spaces between the sand. The water occupied the space previously occupied by the air. OR Water displaced the air between / in the sand.

